

## Elapsed Time & Subtracting to 20

A. Write the time for each clock and calculate the elapsed time.



The first clock 11:10  
 The second clock 7:30  
 Elapsed: 8 hrs. 20 min.






The first clock 12:50  
 The second clock 6:40  
 Elapsed: 5 hrs. 50 min.



The first clock 7:45  
 The second clock 5:20  
 Elapsed: 9 hrs. 35 min.

B. Solve the subtraction problems.

<b>20</b>	$- 4$	<b>16</b>	$- 4$	<b>12</b>	$- 4$	<b>8</b>
$- 2$		$- 3$		$- 5$		$- 4$
<b>18</b>	$- 5$	<b>13</b>	$- 6$	<b>7</b>	$- 3$	<b>4</b>