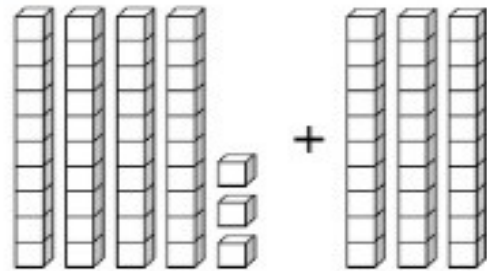
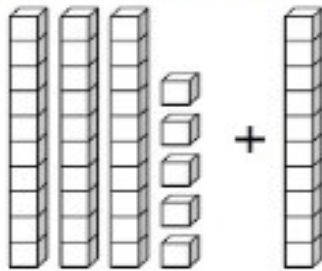


Counting by 10s & Adding Tens


A. Count the number of blocks. Fill in the blanks.



$$\underline{35} + \underline{10} = \underline{45}$$

$$\underline{43} + \underline{30} = \underline{73}$$

B. Count by 10s. Fill in the missing numbers.



C. Solve the addition problems.

75	10	33	10	68	10
+ 10	+ 56	+ 10	+ 19	+ 10	+ 10
85	66	43	29	78	20

46	37	62	51	46	40
+ 10	+ 20	+ 10	+ 30	+ 20	+ 13
56	57	72	81	66	53