



Before and After, Place Value & Adding 11

A. Write the number that comes before and after.

BEFORE		AFTER		BEFORE		AFTER
41	42	43		35	36	37
69	70	71		28	29	30

B. Write a number that matches the place value description.
























7 is in the
tens place:

2 is in the
ones place:

1 is in the
hundreds place:

Answers will vary.

C. Add 11. Fill in the missing numbers on the 100s chart puzzles.

22		64		89		35	36		
	33		75		100		46	47	
17		45		91		70	71		
	28		56		102		81	82	
56		39		27		83	84		
	67		50		38			94	95