




Estimating Sums & Subtracting to 20

A. Estimate the sums by rounding the numbers to the nearest ten. Solve the actual problems as well. Review **Day 53** to help you.

$\begin{array}{r} 36 \rightarrow 40 \\ + 45 \rightarrow + 50 \\ \hline 81 \end{array}$	$\begin{array}{r} 93 \rightarrow 90 \\ + 18 \rightarrow + 20 \\ \hline 111 \end{array}$	$\begin{array}{r} 55 \rightarrow 60 \\ + 75 \rightarrow + 80 \\ \hline 130 \end{array}$
$\begin{array}{r} 61 \rightarrow 60 \\ + 87 \rightarrow + 90 \\ \hline 148 \end{array}$	$\begin{array}{r} 80 \rightarrow 80 \\ + 54 \rightarrow + 50 \\ \hline 134 \end{array}$	$\begin{array}{r} 42 \rightarrow 40 \\ + 34 \rightarrow + 30 \\ \hline 76 \end{array}$
$\begin{array}{r} 22 \rightarrow 20 \\ + 61 \rightarrow + 60 \\ \hline 83 \end{array}$	$\begin{array}{r} 76 \rightarrow 80 \\ + 27 \rightarrow + 30 \\ \hline 103 \end{array}$	$\begin{array}{r} 47 \rightarrow 50 \\ + 34 \rightarrow + 30 \\ \hline 81 \end{array}$

B. Solve the subtraction problems.

$\begin{array}{r} 19 \\ - 5 \\ \hline 14 \end{array}$	$\begin{array}{r} 14 \\ - 3 \\ \hline 11 \end{array}$	$\begin{array}{r} 11 \\ - 2 \\ \hline 9 \end{array}$
$\begin{array}{r} - \\ 3 \\ \hline 16 \end{array}$ 	$\begin{array}{r} - \\ 2 \\ \hline 12 \end{array}$ 	$\begin{array}{r} - \\ 3 \\ \hline 8 \end{array}$ 
$\begin{array}{r} 16 \\ - 4 \\ \hline 12 \end{array}$	$\begin{array}{r} 12 \\ - 4 \\ \hline 8 \end{array}$	$\begin{array}{r} 8 \\ - 3 \\ \hline 5 \end{array}$