


## Telling Time & Let's Review!


A. Draw the hands on each clock face to show the time.




2:45



9:30



11:15



6:45

B. Write the words as numbers.

sixty-eight 68

ninety-seven 97

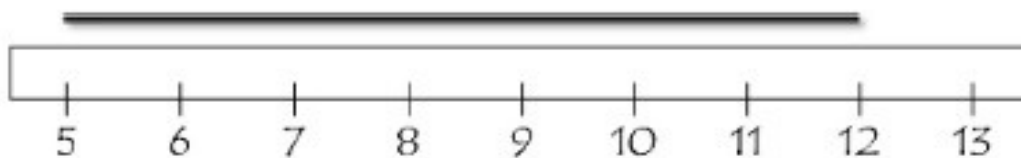


C. Write the amounts of money.

twelve dollars \$12.00

eighteen dollars \$18.00

D. Leah has a broken ruler to measure the string. How long is it?



**7**  
UNITS

E. Solve the problems and fill in the blanks.

✓ What comes next? 325, 323, 321, 319, **317, 315, 313**

✓ 4 tens + 5 hundreds + 3 hundreds + 3 ones = **843**

✓ How many legs do six cows have in total? **24**

✓ How many wings do five ducks have in total? **10**

