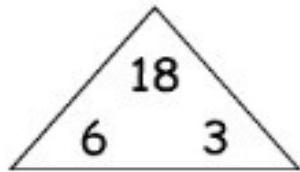


Fact Families & Measuring Length

A. Use the numbers in the triangles to create fact families.

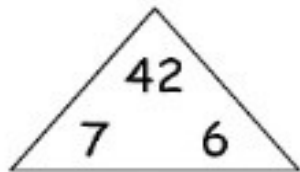


$$6 \times 3 = 18$$

$$18 \div 3 = 6$$

$$3 \times 6 = 18$$

$$18 \div 6 = 3$$

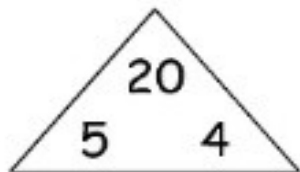


$$7 \times 6 = 42$$

$$42 \div 6 = 7$$

$$6 \times 7 = 42$$

$$42 \div 7 = 6$$

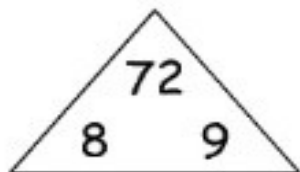


$$5 \times 4 = 20$$

$$20 \div 4 = 5$$

$$4 \times 5 = 20$$

$$20 \div 5 = 4$$



$$8 \times 9 = 72$$

$$72 \div 9 = 8$$

$$9 \times 8 = 72$$

$$72 \div 8 = 9$$

B. Match the diamonds on the centimeter ruler with their positions.

