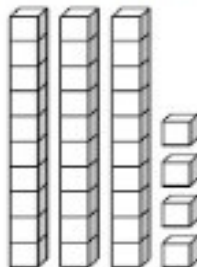


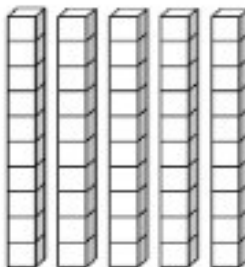




## Subtracting 1-Digit with Regrouping














A. Count the number of blocks. Fill in the blanks.

	-		=	
<u>34</u>	-	<u>7</u>	=	<u>27</u>

	-		=	
<u>50</u>	-	<u>2</u>	=	<u>48</u>

B. Count back by 2s. Fill in the missing numbers.

C. Solve the subtraction problems. Some of the problems may need regrouping.

$12$	$7$	$13$	$28$	$10$	$15$
$- 2$	$- 2$	$- 2$	$- 2$	$- 2$	$- 2$
<span style="border: 1px solid black; padding: 2px;">10</span>	<span style="border: 1px solid black; padding: 2px;">5</span>	<span style="border: 1px solid black; padding: 2px;">11</span>	<span style="border: 1px solid black; padding: 2px;">26</span>	<span style="border: 1px solid black; padding: 2px;">8</span>	<span style="border: 1px solid black; padding: 2px;">13</span>
$21$	$59$	$20$	$36$	$64$	$11$
$- 2$	$- 2$	$- 2$	$- 2$	$- 2$	$- 2$
<span style="border: 1px solid black; padding: 2px;">19</span>	<span style="border: 1px solid black; padding: 2px;">57</span>	<span style="border: 1px solid black; padding: 2px;">18</span>	<span style="border: 1px solid black; padding: 2px;">34</span>	<span style="border: 1px solid black; padding: 2px;">62</span>	<span style="border: 1px solid black; padding: 2px;">9</span>