

Let's Review!

A. Complete the addition and subtraction problems.

$$8 + \underline{5} = 13$$

$$14 - \underline{7} = 7$$



$$124 + 48 = \underline{172}$$

$$218 + 67 = \underline{285}$$

B. Solve the problems and fill in the blanks.

✓ How many tens are in 273?

7

✓ What time is 4 hours and 20 minutes **before** 11:40?

7:20

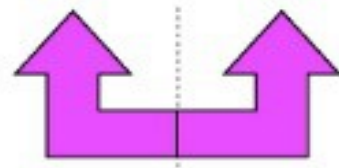

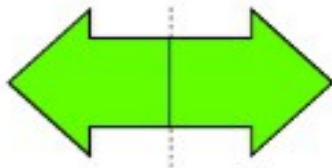
✓ What is the greatest number of coins you need to make 40¢ without using pennies?

8 nickels

✓ If one basket can hold 5 apples, how many baskets do you need to hold 40 apples?

8 baskets

C. Draw the other half of each shape to make it symmetrical.



D. Count by 4s to fill in the blanks.

4, 8, 12, 16, 20, 24, 28, 32, 36, 40

E. East-west highways have even numbers.

North-south highways have odd numbers.