

Let's Review!

A. Solve the addition problems.

$$\begin{array}{r} 25 \\ + 55 \\ \hline 80 \end{array}$$

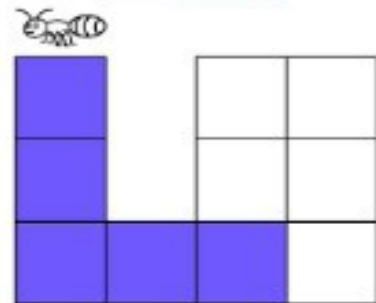
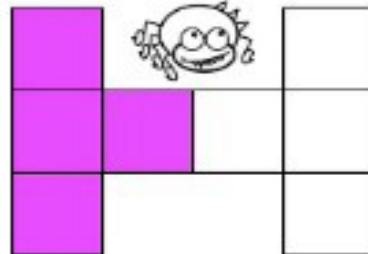
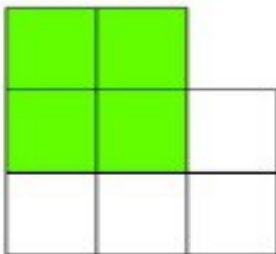
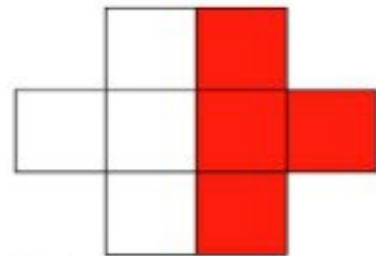
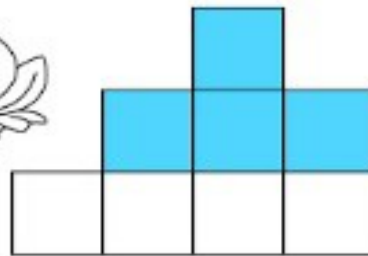
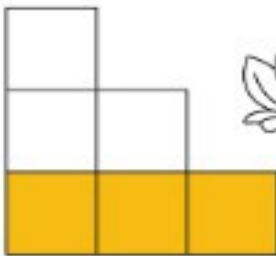
$$\begin{array}{r} 350 \\ + 260 \\ \hline 610 \end{array}$$

$$\begin{array}{r} 122 \\ + 357 \\ \hline 479 \end{array}$$

$$\begin{array}{r} 529 \\ + 312 \\ \hline 841 \end{array}$$

$$\begin{array}{r} 349 \\ + 324 \\ \hline 673 \end{array}$$

B. Color one-half of each shape with your favorite color!



C. Solve the word problem. Use the space on the right for your work area.

A tree has four branches.
 Each branch has two nests.
 Each nest has five eggs.
 How many eggs are there in all?
 40 eggs

There are 4×2 nests.
 $8 \text{ nests} \times 5 \text{ eggs} = 40$