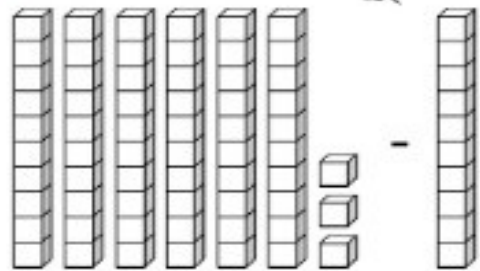
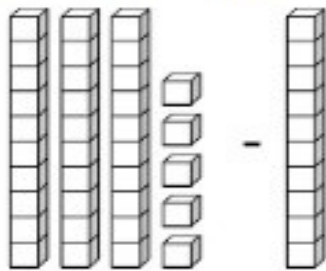



## Counting Back by 10s & Subtracting Tens

A. Count the number of blocks. Fill in the blanks.



$$\underline{35} - \underline{10} = \underline{25} \quad \text{☘} \quad \underline{63} - \underline{10} = \underline{53}$$

B. Count back by 10s. Fill in the missing numbers.



C. Solve the subtraction problems.

70	10	16	64	55	21
- 10	- 10	- 10	- 10	- 10	- 10
<b>60</b>	<b>0</b>	<b>6</b>	<b>54</b>	<b>45</b>	<b>11</b>
83	29 ☘	48	97	35	76
- 10	- 10	- 10	- 10	- 10	- 10
<b>73</b>	<b>19</b>	<b>38</b>	<b>87</b>	<b>25</b>	<b>66</b>