

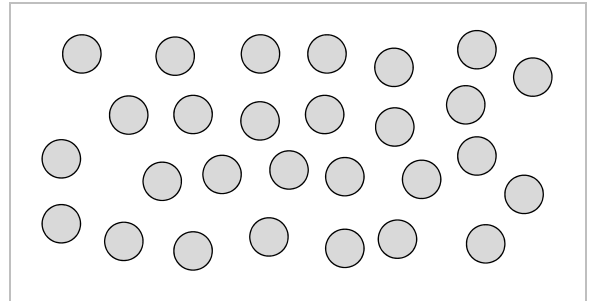
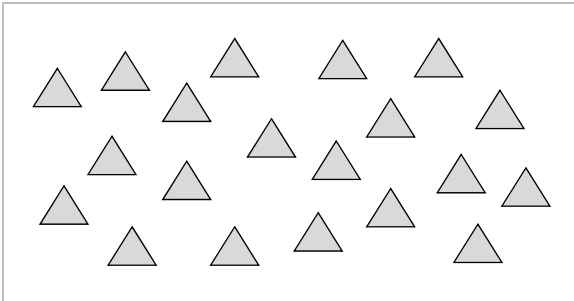


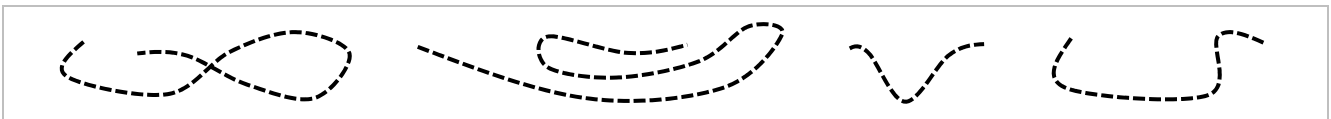


Estimation & Comparison

A. Estimate and compare the numbers of objects using $>$, $<$, or $=$.



B. Circle the shortest string in each set.



C. Complete the comparisons. Many solutions are possible.

<input type="text"/>	$<$	46	*	76	$>$	<input type="text"/>	*	45	$<$	16	+	<input type="text"/>
<input type="text"/>	$>$	38	*	20	$<$	<input type="text"/>	*	88	$<$	52	+	<input type="text"/>
<input type="text"/>	$>$	62	*	84	$>$	<input type="text"/>	*	25	$>$	30	-	<input type="text"/>