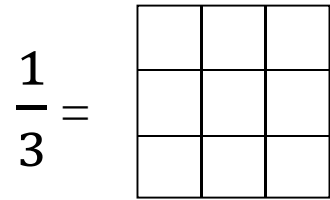
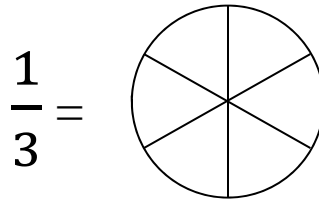
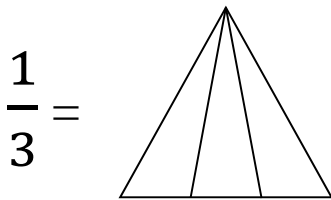
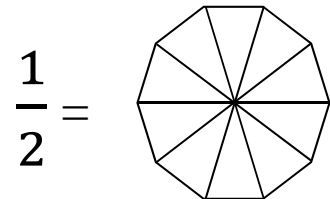
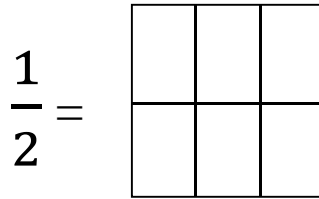
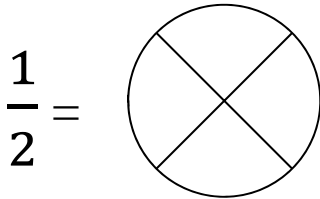




Fractions & Subtracting Weights

A. Color in the shape to show the fraction.



B. Look at the weight of each coin and answer the questions.

Penny 3.11 grams	Nickel 5 grams	Dime 2.27 grams	Quarter 5.67 grams
---------------------	-------------------	--------------------	-----------------------

How many more grams does a nickel weigh than a penny?

$$\begin{array}{r} 5.00 \\ - 3.11 \\ \hline \end{array}$$

How many fewer grams does a dime weigh than a quarter?



Two coins have a value of 15 cents. What is the weight difference between the two coins?



Two coins have a value of 26 cents. What is the weight difference between the two coins?

