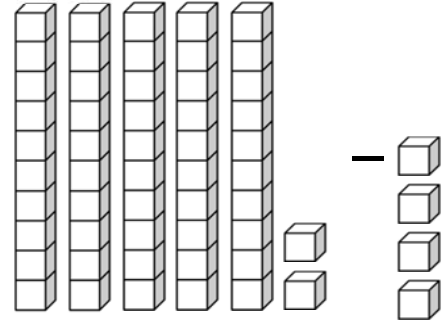

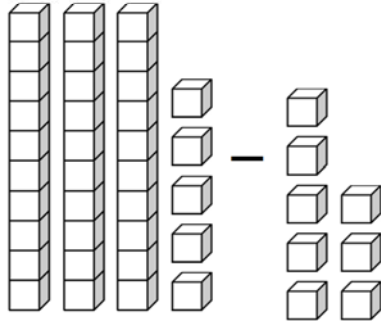


Subtracting 1-Digit with Regrouping

A. Count the number of blocks. Fill in the blanks.



35 - 8 = _____ _____ - _____ = _____

B. Let's practice subtraction with regrouping. The first one is done for you.

$\begin{array}{r} 5\ 13 \\ \cancel{6}3 \\ - 9 \\ \hline 54 \end{array}$	$\begin{array}{r} 14 \\ - 6 \\ \hline \end{array}$	$\begin{array}{r} 55 \\ - 6 \\ \hline \end{array}$	$\begin{array}{r} 73 \\ - 5 \\ \hline \end{array}$	$\begin{array}{r} 36 \\ - 9 \\ \hline \end{array}$	$\begin{array}{r} 24 \\ - 7 \\ \hline \end{array}$
---	--	--	--	--	--

C. Solve the subtraction problems. Some of the problems may need regrouping.

$\begin{array}{r} 27 \\ - 9 \\ \hline \end{array}$	$\begin{array}{r} 85 \\ - 7 \\ \hline \end{array}$	$\begin{array}{r} 35 \\ - 9 \\ \hline \end{array}$	$\begin{array}{r} 65 \\ - 5 \\ \hline \end{array}$	$\begin{array}{r} 29 \\ - 4 \\ \hline \end{array}$	$\begin{array}{r} 46 \\ - 8 \\ \hline \end{array}$
--	--	--	--	--	--

$\begin{array}{r} 51 \\ - 9 \\ \hline \end{array}$	$\begin{array}{r} 94 \\ - 8 \\ \hline \end{array}$	$\begin{array}{r} 48 \\ - 3 \\ \hline \end{array}$	$\begin{array}{r} 19 \\ - 9 \\ \hline \end{array}$	$\begin{array}{r} 62 \\ - 8 \\ \hline \end{array}$	$\begin{array}{r} 51 \\ - 7 \\ \hline \end{array}$
--	--	--	--	--	--