



## Let's Review!

A. Complete the addition and subtraction problems.

$8 + \underline{\quad} = 13$



$124 + 48 = \underline{\quad}$

$14 - \underline{\quad} = 7$

$218 + 67 = \underline{\quad}$

B. Solve the problems and fill in the blanks.

✓ How many tens are in 273?

\_\_\_\_\_

✓ What time is 4 hours and 20 minutes before 11:40?

\_\_\_\_\_

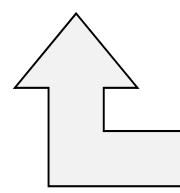
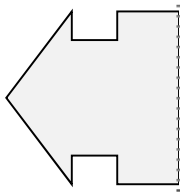
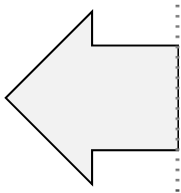
✓ What is the greatest number of coins you need to make 40¢ without using pennies?

\_\_\_\_\_

✓ If one basket can hold 5 apples, how many baskets do you need to hold 40 apples?

\_\_\_\_\_

C. Draw the other half of each shape to make it symmetrical.



D. Count by 4s to fill in the blanks.

4, 8, \_\_\_\_\_, \_\_\_\_\_, \_\_\_\_\_, \_\_\_\_\_, 28, \_\_\_\_\_, \_\_\_\_\_, 40

E. Ask your parents to tell you the numbers of some east-west and north-south highways. Record them. What do you notice?