







Let's Review!

A. Write multiplication facts for the array of dots.



$2 \times 3 = \underline{\quad}$ $3 \times 2 = \underline{\quad}$



B. Solve each money word problem. Write the amount in cents.

Henry has 4 dimes, 5 nickels, and 7 pennies. How much money does Henry have in all? _____ ¢

Orson has 2 quarters, 2 dimes, 3 nickels, and 4 pennies. How much money does Orson have in all? _____ ¢

Jacob bought four stickers. Each sticker costs 14¢. How much money did Jacob spend in all? _____ ¢

C. Put each number into the appropriate space of the Venn diagram.

12 88
67 45

