

Counting to Subtract


Draw **X** over the objects to subtract. Count the remaining objects.



$$5 - 1 = \underline{\quad}$$




$$5 - 3 = \underline{\quad}$$



$$5 - 4 = \underline{\quad}$$



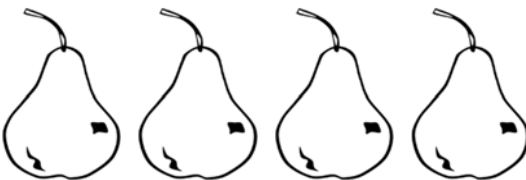
$$5 - 2 = \underline{\quad}$$



$$4 - 4 = \underline{\quad}$$



$$4 - 2 = \underline{\quad}$$



$$4 - 1 = \underline{\quad}$$



$$4 - 3 = \underline{\quad}$$